

MBS INTERNATIONAL SCHOOL

Sector-11, Dwarka

Session-2019-20

Holiday Homework

Grade-V

Happy
Summer




VACATION RESOLUTION

by Lenore Hetrick


I'm not getting up tomorrow!
Though I hear my mother call,
"Waffles and honey for breakfast!"
I'll turn my face to the wall.
I'm not getting up though my friends come
Yelling, "We're off to the river!"
I'll just close my eyes and sleep
Without a regretful shiver.

The first day of vacation!
Oh grand and glorious feeling!
The solid bed beneath me,
Above, the dear old ceiling!
And I won't get up, I tell you,
To dine with a golden cup.
Not even if the President calls -
Still I won't get up.



Some useful tips for summer vacation

- ✓ Drink lots of water.
- ✓ Carry a water bottle everywhere you go.
- ✓ Wear light cotton clothes.
- ✓ Have plenty of seasonal fruits like musk-melon, water-melon, mango, cucumber, etc.
- ✓ Discover your creativity through Worksheets.
- ✓ Study for an hour to two hours everyday.
- ✓ Explore various games.
- ✓ Enjoy your holiday trips.



GENERAL INSTRUCTIONS

1. All the work should be neatly done.
2. It should be decorated beautifully and creatively.
3. Do homework on your own. Take guidance from parents if required.
4. Design an attractive cover for your file / folder.
5. Have a labelled cover page for each subject.
6. All worksheets of a subject should be put together / tied/ stapled together and handed over to the respective subject teachers on the first day of rejoining after summer break.
7. Revise the syllabus for PT-1.

8. Remember, the best approach is to do a little work each day instead of trying to do a lot all at once!

9. Reading out from colourful illustrated storybooks will develop your language skills. (Roald Dahl, Sudha Murthy, Ruskin Bond)

10. Inculcate good manners, healthy habits and respect for elders.

11. Communication skills play a pivotal role in grooming the overall Personality. Converse in English to get comfortable with the language.

12. Spend quality time with your elders getting engaged in activities based on enhancing your powers of observation and imagination.

Follow the given instructions to complete the holiday homework.

English	Question 1,2 and 4 on A-4 Sheet. Question 5 to 8 in worksheet.
SST	Question 1& 2 in Scrap Book.
Science	Question 1 & 2 in Scrap Book.
Maths	Question 1 in Worksheet Book. Question 2 on chart paper. Question 3 on A-4 sheet. Question 4 to 17 in worksheet.
Hindi	क्रिया कलाप पर आधारित प्रश्न 3 रंगीन ए-४ शीट पर करें। क्रिया कलाप पर आधारित प्रश्न 1,2 व 4 सुलेख पुस्तिका में करें। प्रश्न 5 कार्य पत्रिका में ही करें।
Sanskrit	Question 1,2 and 3 on A-4 Sheet.
French	Question 1 and 2 on A-4 Sheet.
Art & Craft	In Book.



1. Interview a person who helps you in your day to day life.

(maid/milkman/watchman/postman/cook)

Paste the picture of your helper too.

2. Maintain a record of all the good deeds done by you during the vacation. Write about at least one good deed you did. (The good deed could be helping your parents / grandparents / siblings / neighbours / anyone in need of help, being kind to animals, taking care of plants and trees or anything that makes you happy or feel good about yourself.)

3. Make a beautiful Bookmark with an inspiring quotation.

4. Read two story books by different authors. Write the names of the books, authors and the character you liked the most in each story. Write the summary of any two stories from the same books. Design a cover page .

5. Read the following passage and answer the questions that follow.

The colours and markings on the body of some animals match the surroundings in which they live. This makes it difficult to spot them. This art of hiding amongst the surroundings and not being clearly visible is called camouflage. Animals use camouflage to hide from their enemies. The leaf insect has many markings on its wings that look just like veins of a leaf. It is very difficult to spot the insect sitting on the leaf. The stick insect looks like a thin twig. It is brown and stick like in appearance. It can easily hide among twigs. A tiger's coat has a pattern of dark and light stripes. This makes it hard to spot it when it creeps through long grass.

a. What is camouflage?

b. Why is it difficult to spot a leaf insect among the leaves?



c. Complete the sentences.

i. The stick insect can easily hide among twigs because _____.

ii. The animals use camouflage to _____.

d. Find out the antonym of 'friends' from the passage.

e. Pick out the homophone for 'Court' from the passage.

6. In the passage given below there is an error. Find the error and write the incorrect and correct words as given in question.

Incorrect Correct

My grandmother is an old women. (a) _____

She is slim and short. She wore glasses (b) _____

and is always dressed up on spotless white (c) _____

sari. Since I had working parents, most of (d) _____

my time is spent in his company. (e) _____

I respects her a lot. (f) _____

7. Rearrange the following group of words to make meaningful sentences by using capital letters and correct punctuation marks.

a. piano plays the rohini

b.to goa are we going Saturday on

c.invited neighbours we all our to party the

d.girls library reading the are in the

8. Write the plural of the following words.

a. actress _____

c. tooth _____

b. foot _____

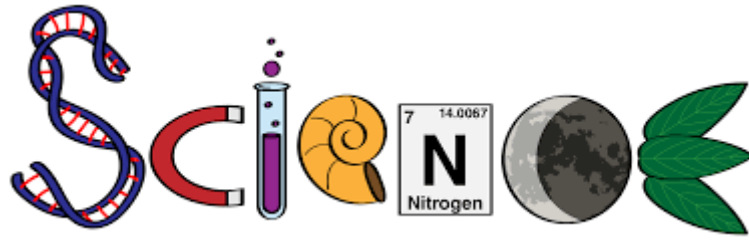
d. shelf _____



SST

1. To mark the 100 years of the Jallianwala Bagh Massacre let's pay a tribute to the people and the freedom fighters who lost their life in the struggle for the independence .Read about some of the famous freedom fighters and write a biography on any one of them and also paste the pictures .

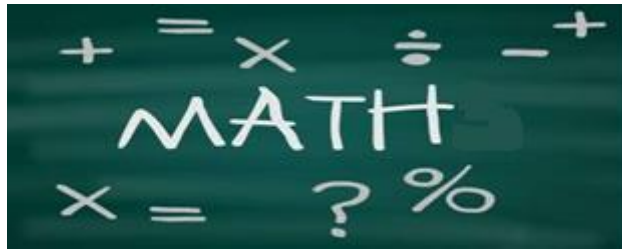
2. Make a project on the country given below.
 - a. Roll no 1 -15- Saudi Arabia
 - b. Roll no 16 -30- Greenland
 - c. Roll no 31 onwards The Republic Of Congo
 - i. Mention its physical features
 - ii. Life style of the people
 - iii. Language spoken
 - iv. Flag
 - v. Tribes
 - vi. Currency
 - vii. Resources



1. Prepare a scrap book on water crisis. The scrap book should be prepared by pasting newspaper cuttings date wise related to the latest happenings and sufferings of people due to water crisis and drought in:

- a. Our country India
- b. Other countries on the globe.

2. Plant a sapling in your garden or any place in your neighbourhood, Water it daily. Take pictures of this activity and track the sapling's growth and paste / draw the pictures in your scrap book.



1. Do Worksheet and Activity no. 4, 5, 6, 7, 8, 9 in Math Worksheet Book.
2. Make creative charts for the topics given according to your roll numbers.
 - a. Make Indian and International place value chart. (Roll no: 1 to 10)
 - b. Make a chart of different types of fractions with the help of pictorial presentation (Roll no : 11 to 20)
 - c. Make a chart showing line, line segment and Ray. (Roll no : 21 to 30)
 - d. Make a chart representing Roman numerals. (Roll no: 31 onwards)
3. Collect the population data of the top five most populated countries in the world and write them in both Indian and the International place value systems.



4. Fill in the blanks.

a. Numbers that we add together are called

_____.

b. The answer of addition sum is called the _____ and that of subtraction is called the

_____.

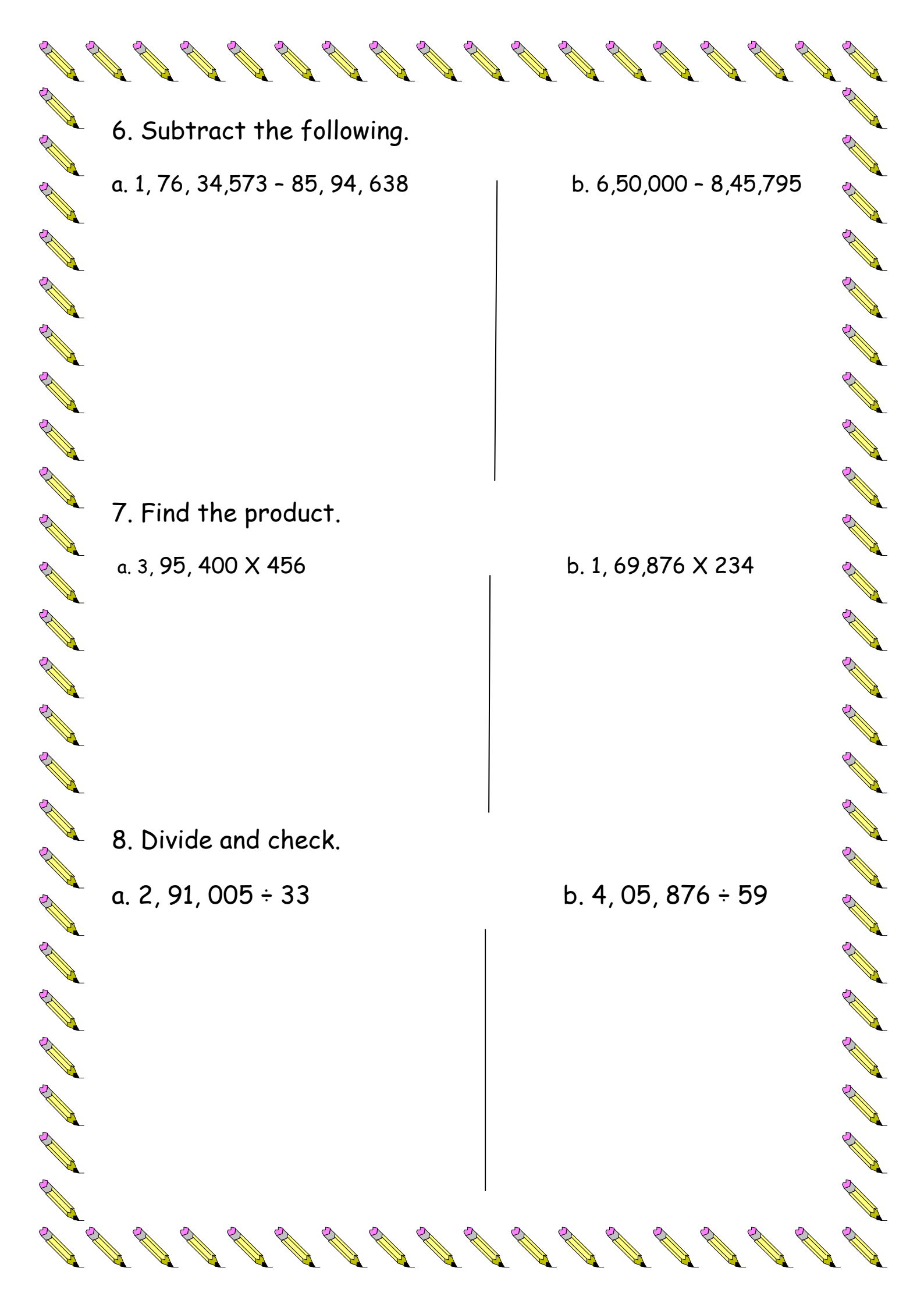
c. We always start addition or subtraction from a _____ place.

d. _____ is repeated addition of a number whereas _____ is a process of repeated subtraction.

5. Add the following:

a. $74,85,300 + 1,72,00,055$
 $+ 8,23,075$

b. $6,55,30,500 + 45,515$
 $+ 39,58,007$



6. Subtract the following.

a. $1,76,34,573 - 85,94,638$

b. $6,50,000 - 8,45,795$

7. Find the product.

a. $3,95,400 \times 456$

b. $1,69,876 \times 234$

8. Divide and check.

a. $2,91,005 \div 33$

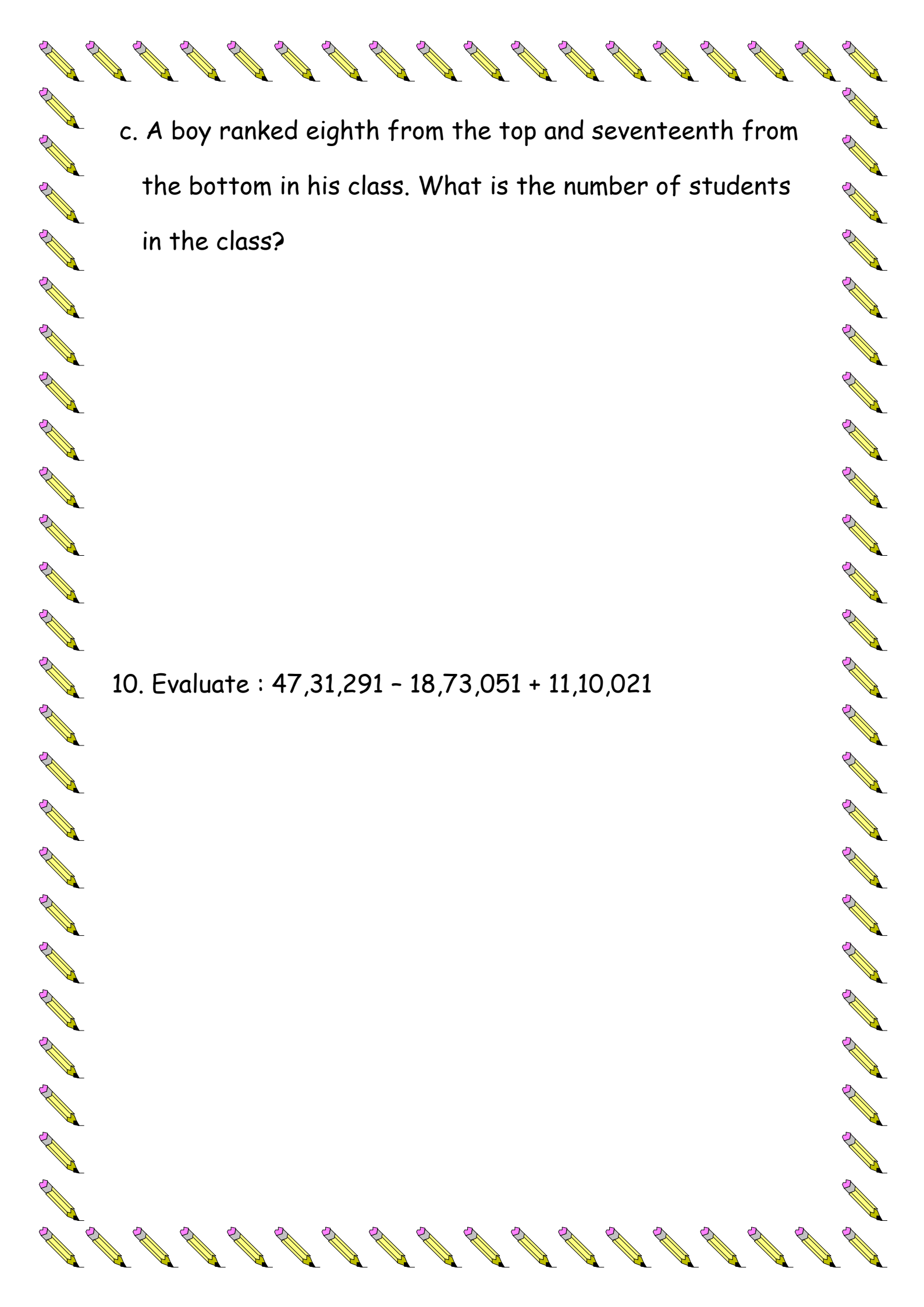
b. $4,05,876 \div 59$



9. Solve the following word problems.

a. A factory has 256 workers. Each worker is paid ₹ 38860 as monthly salary. What is the total amount of salary to be paid to the workers every month?

b. What should be multiplied by 58 to get 13,456?



c. A boy ranked eighth from the top and seventeenth from the bottom in his class. What is the number of students in the class?

10. Evaluate : $47,31,291 - 18,73,051 + 11,10,021$



11. Write the numerals for the following:

a. Four lakh seventy-seven thousand three hundred forty two. _____

b. Nine crore eighty two lakh two thousand fifty six.

12. Write the expanded form of the following numbers.

a. 68, 52,791- _____

b. 9, 12, 847- _____

13. Compare the following by using $>$, $<$ or $=$.

a. 77,85,879 _____ 27,94,864

b. 54, 08,342 _____ 64,82,946

14. Write the following numbers in standard form.

a. 5,00,000 + 4,000 + 600 + 4 _____

b. 10, 00,000+ 70,000 + 8,000 + 80 + 2 _____



15. Solve and write the answer.

a. $LXXIV + CX$

b. $CXCIV - CLXIX$

16. Answer the following questions.

a. The population of the village is 4875. Round it off to the nearest 1000.

b. A factory produced 3,87,865 pink bulbs and 4,26,797 green bulbs . How many bulbs did it produce altogether (Round it off to the nearest 100) ?

17. Write the following numbers in word.(International system)

a. 2035708 - _____

b. 73029008 - _____



1. Make an alphabet chart and decorate it (Roll no. 1-20)
2. Write the number names (1-20) in French and decorate it.
(Roll no. 21 onwards)



1. सुलेख कॉपी में प्रत्येक सप्ताह में तीन पृष्ठ साफ़ - साफ़ सुलेख लिखें।
2. ३० कठिन शब्द समाचार पत्र से छाँटकर वाक्य में प्रयोग करें।
3. हिंदी समाचार पत्र से 'पानी की समस्या' या 'खेल समाचार' के बारे में कोलाज बनाइए।
4. ग्रीष्मकाल में अपने माता-पिता के साथ किसी ऐतिहासिक स्थल पर घूमने जाएँ व अपनी यात्रा पर एक अनुच्छेद लिखें।

5. गद्यांश को ध्यानपूर्वक पढ़कर प्रश्नों के उत्तर दीजिए-

हमारी धरती का इतिहास बहुत वर्ष पुराना है । पहले धरती बनी , फिर पेड़ - पौधे उगे । हरियाली आई , जीव-जंतु आए और फिर मनुष्य का जन्म हुआ । आदमी ने सोचा-अरे! ये पेड़-पौधे तो धरती के गहने हैं । इनसे हमें फल-फूल मिलते हैं , छाया मिलती है और भी इनमें बहुत सारे गुण हैं । बारिश में यही पेड़ हमारे लिए छाता बन जाते हैं । कोई सफ़र कर रहा हो तो पेड़ के नीचे आराम करके सारी थकान दूर हो जाती है और पक्षियों के तो यह घर ही हैं ।

यह आदमी को इतना अच्छा लगा कि उसने सोचा कि पेड़ तो जगह-जगह होने चाहिए । जो भी सुंदर फल-फूल वाला या छायादार पेड़ उसे लगा , उसने उसे अपने आस-पास उगाने की कोशिश की । इससे हुआ यह कि एक पेड़ जो किसी एक जगह होता था , वह दुनिया के लगभग सभी देशों में नज़र आने लगा ।

क. पेड़ों से हमें क्या-क्या मिलता है ?

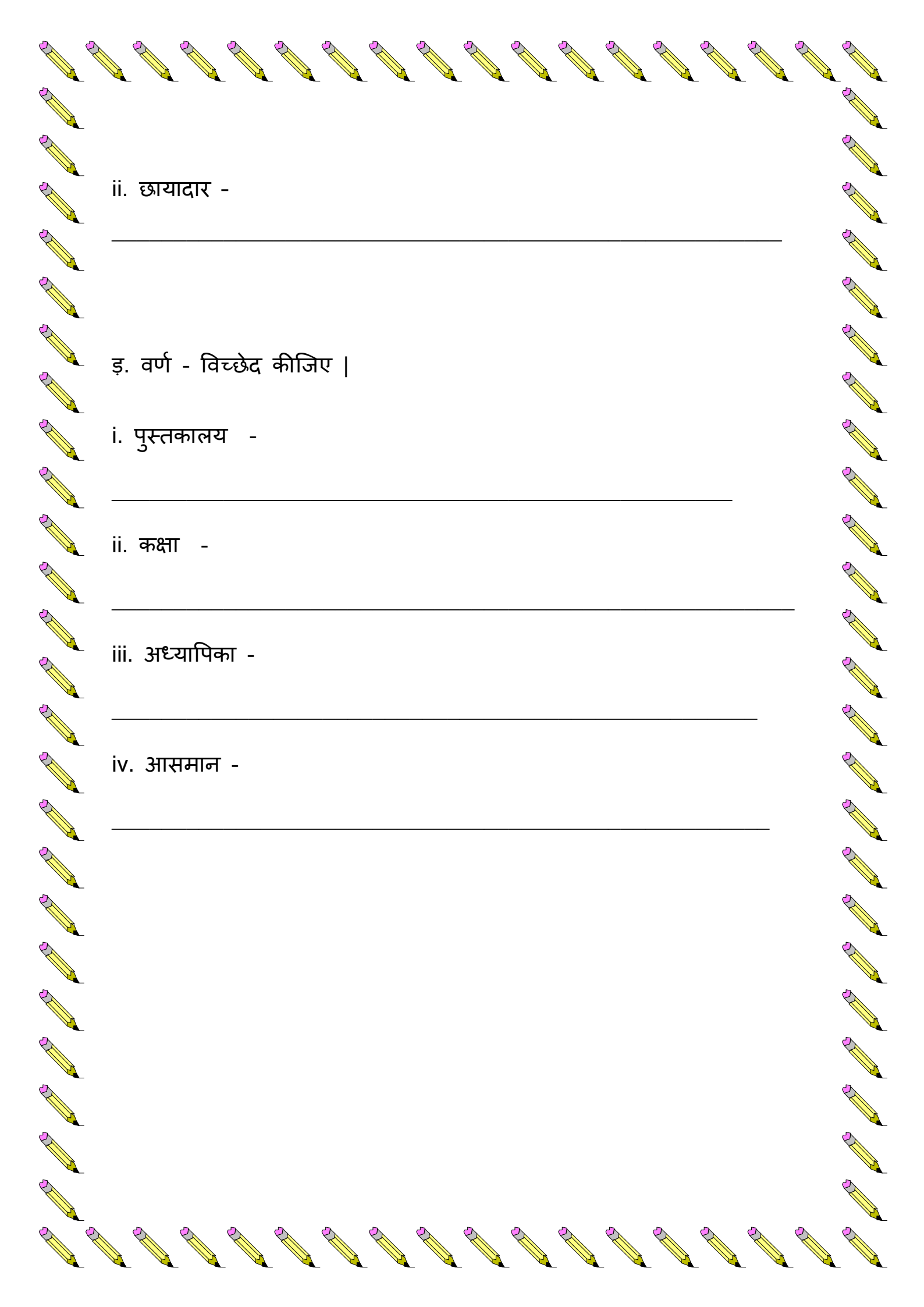
ख. पक्षियों के घर कहाँ पर होते हैं ?

ग. गद्यांश में से शब्दों के समानार्थी शब्द लिखिए -

i. वर्षा - _____ ii. वृक्ष - _____

घ. वाक्य बनाओ-

i हरियाली-



ii. छायादार -

इ. वर्ण - विच्छेद कीजिए ।

i. पुस्तकालय -

ii. कक्षा -

iii. अध्यापिका -

iv. आसमान -
